










Tools

This worksheet contains a collection of links to videos that introduce the names of tools and some follow up exercises with the Answer Keys.

Step 1. Watch the introductory video, study the pictures and do the matching exercise on the right.

Introduction to the vocabulary

<https://www.youtube.com/watch?v=1TrKmdLDIV0&feature=relatedn>

 hammer	 wood plane	 wood file	 bit and brace
 hand saw	 hand drill	 nail set	 auger bit
 flat head screwdriver	 standard drill bit	 try square	 scratch awl
 phillips head screwdriver	 wood chisel	 hot melt glue gun	 coping saw
 drill press	 wire cutters	 power hand drill	 power sander
 standard pliers	 needle nose pliers	 vise grips	 adjustable wrench
 quick grip clamp	 ball pein hammer	 C clamp	 mallet
 hack saw	 tin snips	 tape measure	 safety glasses

**Now draw lines
to match the tool
with its name**

<http://www.enchantedlearning.com/alphabet/matchwordsandpix/tools/tiny.GIF>

Draw a line from each picture to the matching word. Name: _____



hammer
 nail
 pliers
 wrench
 saw
 screwdriver
 drill
 screw
 ax
 rake

http://www2.newton.k12.ma.us/~mike_whitman/extracredit/grade6/FOV1-0005C99C/tools_worksheet_makeup.gif

Step 2. Learn to identify the names of the tools in a talk.

2.1. Listen to the explanations

<https://www.youtube.com/watch?v=u7mvC1PMrnA>

<https://www.youtube.com/watch?v=oPvQL2475LU>

2.2. Check what you remember when listening to the summary

https://www.youtube.com/watch?v=YNIA_dc70bY

Please, go to the next page.

Step 3. Practice.

Complete the sentences with the names of the tools. (The Answer Keys are at the bottom of the page).

- | | |
|---|----------------------------------|
| 1. You use _____ to clamp on to something, squeeze it and lock it in place. | |
| 2. _____ is used to turn nuts. | a) an air hammer |
| 3. _____ is used to nail pieces of wood together. | b) nails |
| 4. We use the hammer part of the head to pound _____ into wood. | c) a drill |
| 5. You can use the claw part of _____ to remove/ to pull back out the nail from the wood. | d) ball-pein/peen |
| 6. A _____ hammer is used for pounding metal, rounding and shaping it. | e) a Phillips (PH) |
| 7. If you need to drive a lot of nails, you might wish to use _____. | f) a hammer |
| 8. Some tools should be mounted on _____ | g) a crescent/ adjustable wrench |
| 9. _____ helps you to make corners. | h) a workbench |
| 10. You can drive screws in using _____ or _____. | i) a vise/vice grip |
| 11. _____ screwdriver has a head with two partial slots crossed at right angles. | j) a corner clamp |
| | k) a claw hammer |
| | l) a screwdriver |

Answer Keys: 1i, 2g, 3k, 4b, 5f, 6d, 7a, 8h, 9j, 10L and c, 11e